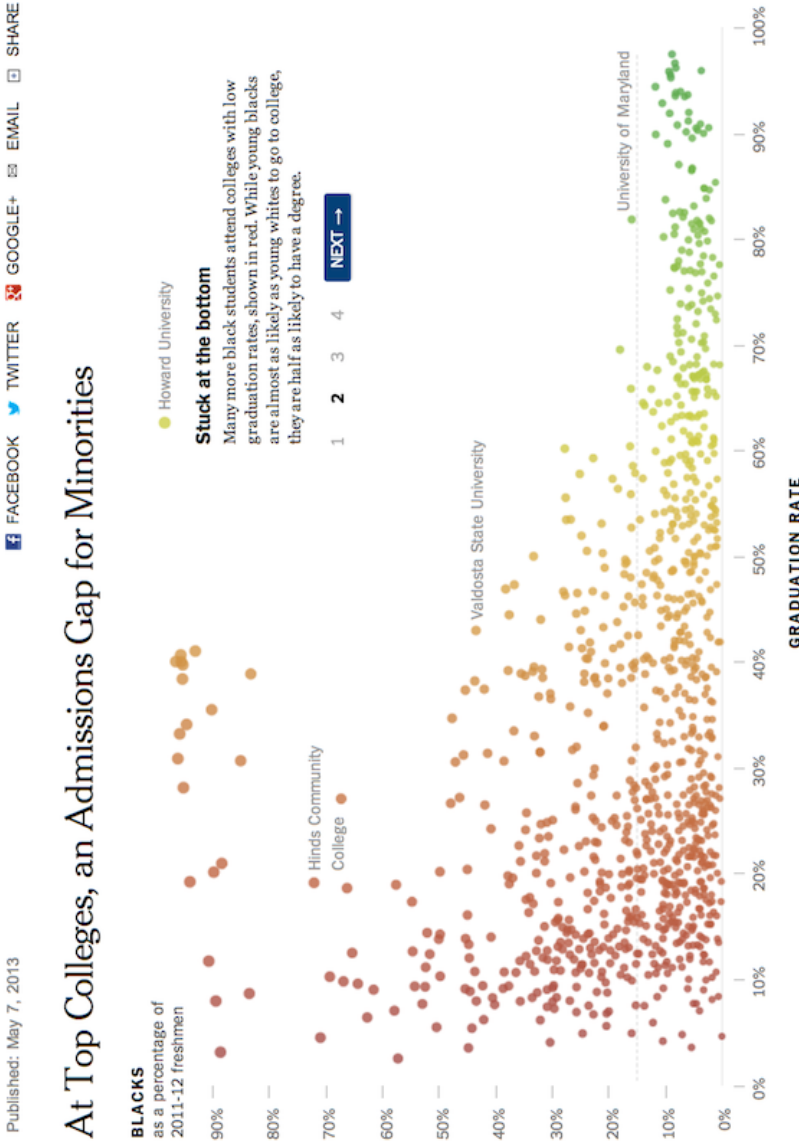


Eye-Training for Data Graphics

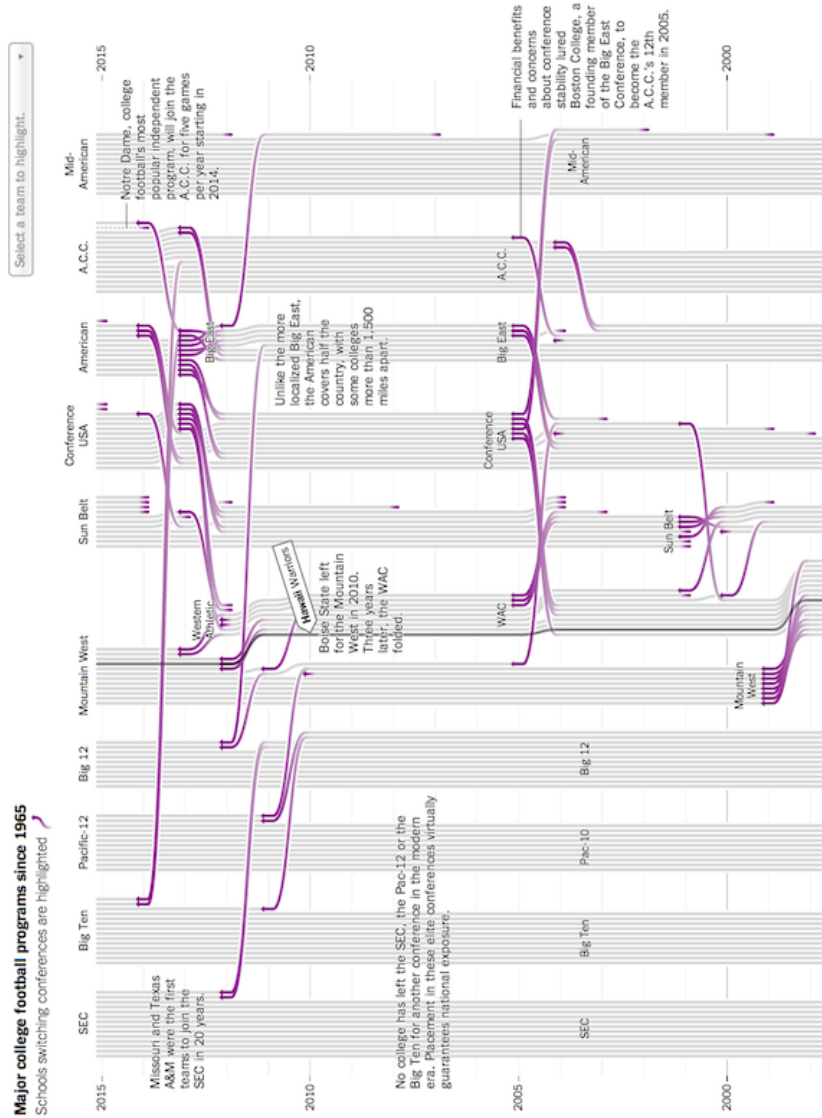
Admissions gap



1. What variables form the frame?
2. What glyphs (marks/geoms) are used?
3. What are the aesthetics (properties) for those glyphs?
4. Which variables are mapped to each aesthetic?
5. Which variables, if any, are used for faceting (small multiples)?
6. Which scales have a corresponding guide?
7. What would a row of the data used to create this plot look like? (Include variable names and (estimated) values.)
8. What are the biggest strengths/weakness of this plot?
9. Are there any elements of this plot that don't fit into the "grammar of graphics"?

Source: <https://archive.nytimes.com/www.nytimes.com/interactive/2013/05/07/education/college-admissions-gap.html>

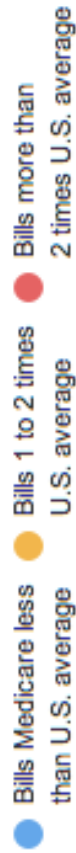
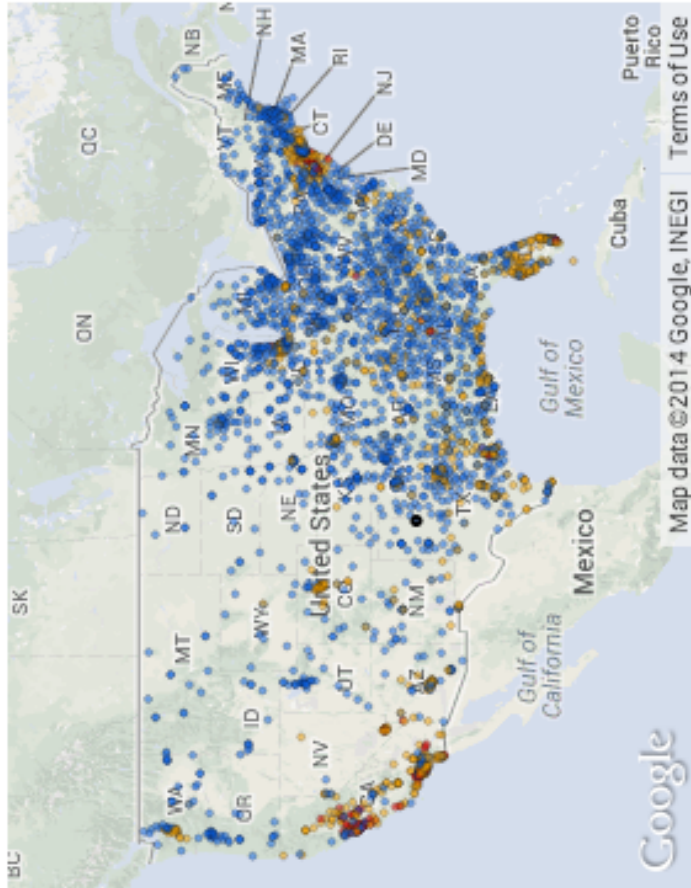
Football leagues



1. What variables form the frame?
2. What glyphs (marks/geoms) are used?
3. What are the aesthetics (properties) for those glyphs?
4. Which variables are mapped to each aesthetic?
5. Which variables, if any, are used for faceting (small multiples)?
6. Which scales have a corresponding guide?
7. What would a row of the data used to create this plot look like? (Include variable names and (estimated) values.)
8. What are the biggest strengths/weakness of this plot?
9. Are there any elements of this plot that don't fit into the "grammar of graphics"?

Source: <https://www.nytimes.com/newsgraphics/2013/11/30/football-conferences/index.html>

Medicare



1. What variables form the frame?
2. What glyphs (marks/geoms) are used?
3. What are the aesthetics (properties) for those glyphs?
4. Which variables are mapped to each aesthetic?
5. Which variables, if any, are used for faceting (small multiples)?
6. Which scales have a corresponding guide?
7. What would a row of the data used to create this plot look like? (Include variable names and (estimated) values.)
8. What are the biggest strengths/weakness of this plot?
9. Are there any elements of this plot that don't fit into the "grammar of graphics"?

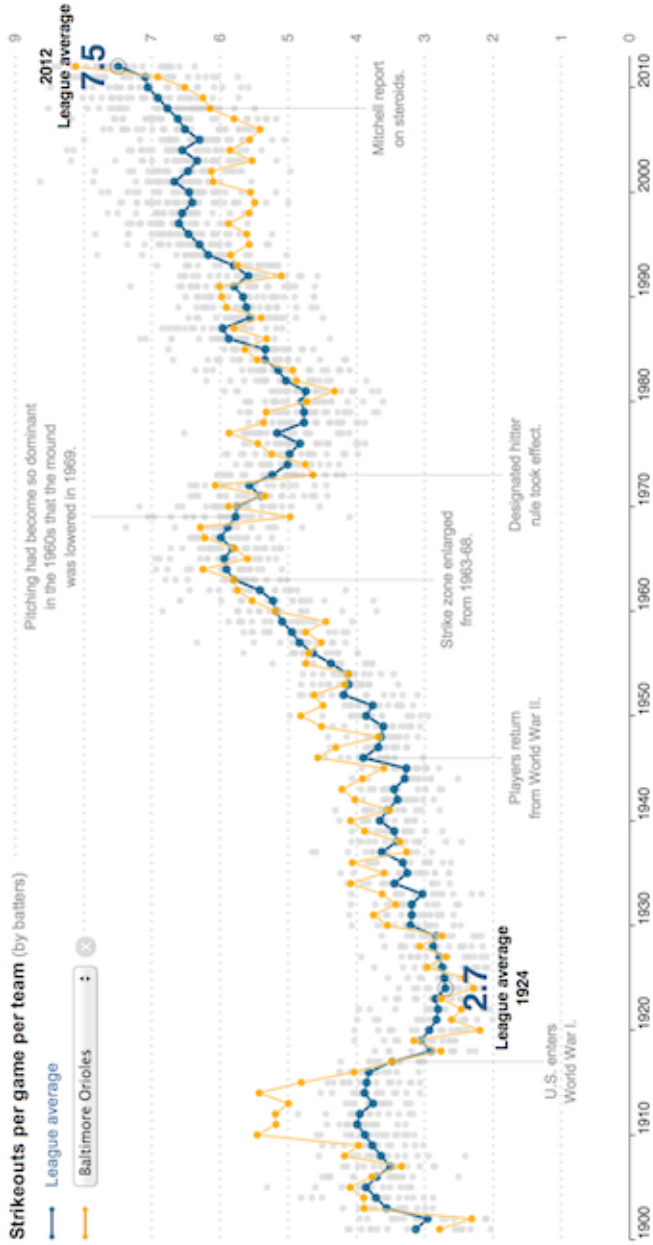
Strikeouts

FACEBOOK TWITTER GOOGLE+ EMAIL SHW

Published: March 29, 2013

Strikeouts on the Rise

There were more strikeouts in 2012 than at any other time in major league history.



1. What variables form the frame?
2. What glyphs (marks/geoms) are used?
3. What are the aesthetics (properties) for those glyphs?
4. Which variables are mapped to each aesthetic?
5. Which variables, if any, are used for faceting (small multiples)?
6. Which scales have a corresponding guide?
7. What would a row of the data used to create this plot look like? (Include variable names and (estimated) values.)
8. What are the biggest strengths/weakness of this plot?
9. Are there any elements of this plot that don't fit into the "grammar of graphics"?

Source: <https://rethinkingvis.com/visualizations/80>

Recession

Published: October 9, 2013

[FACEBOOK](#)
[TWITTER](#)
[GOOGLE+](#)
[EMAIL](#)
[SHARE](#)

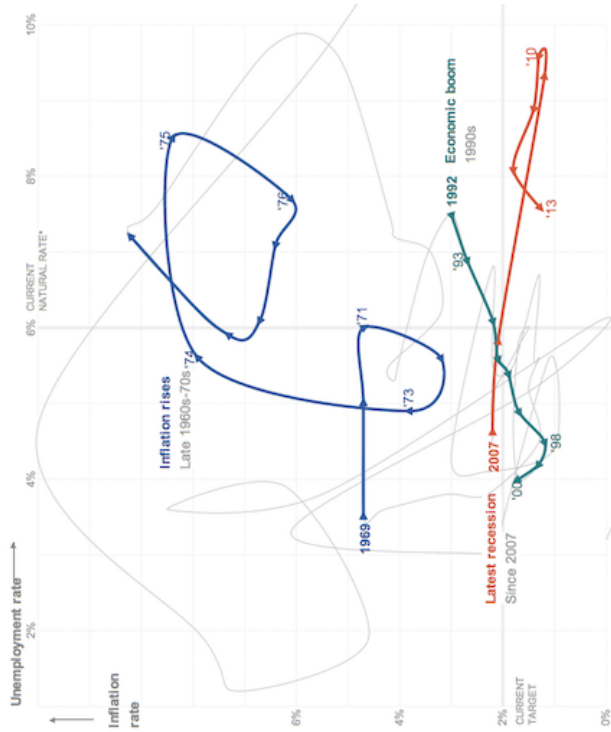
Janet L. Yellen, on the Economy's Twists and Turns

1 2 3 4 5 6 7
NEXT >

Inflation and unemployment

The Federal Reserve is said to have a "dual mandate": keeping inflation in check and the unemployment rate low. These measures, which tend to change cyclically and in concert with each other, are charted for every year since the Great Depression.

In speeches and in meetings, Ms. Yellen, the nominee for the next Fed leader, has commented on the Fed's actions during significant periods, providing a window into her views and priorities.



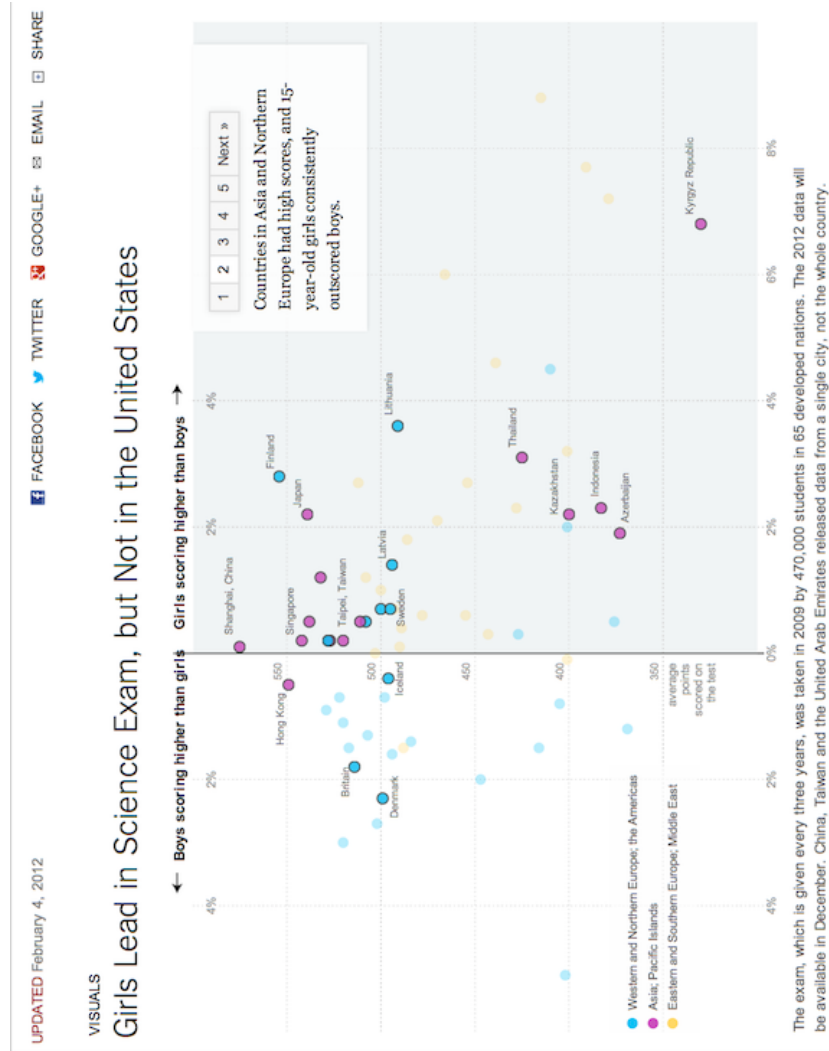
*The natural rate of unemployment is defined as the lowest sustainable level of unemployment over the long term. If the rate is pushed any lower than the natural level, wages and prices would rise.

By TOM GIRATIKANON and ALICIA PARLAPIANO

1. What variables form the frame?
2. What glyphs (marks/geoms) are used?
3. What are the aesthetics (properties) for those glyphs?
4. Which variables are mapped to each aesthetic?
5. Which variables, if any, are used for faceting (small multiples)?
6. Which scales have a corresponding guide?
7. What would a row of the data used to create this plot look like? (Include variable names and (estimated) values.)
8. What are the biggest strengths/weakness of this plot?
9. Are there any elements of this plot that don't fit into the "grammar of graphics"?

Source: <https://archive.nytimes.com/www.nytimes.com/interactive/2013/10/09/us/yellen-fed-chart.html>

Science Scores



1. What variables form the frame?
2. What glyphs (marks/geoms) are used?
3. What are the aesthetics (properties) for those glyphs?
4. Which variables are mapped to each aesthetic?
5. Which variables, if any, are used for faceting (small multiples)?
6. Which scales have a corresponding guide?
7. What would a row of the data used to create this plot look like? (Include variable names and (estimated) values.)
8. What are the biggest strengths/weakness of this plot?
9. Are there any elements of this plot that don't fit into the "grammar of graphics"?

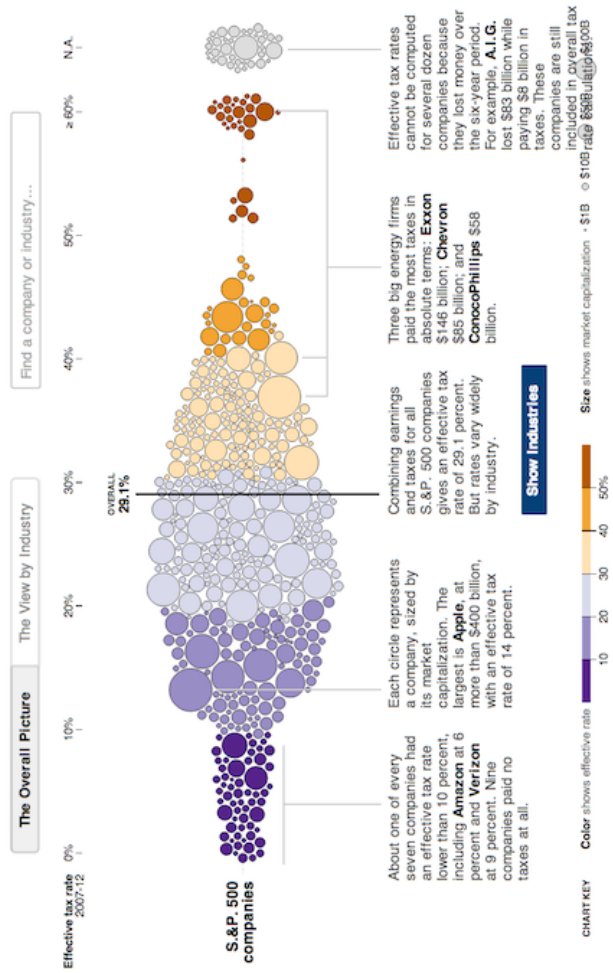
Source: <https://archive.nytimes.com/www.nytimes.com/interactive/2013/02/04/science/girls-lead-in-science-exam-but-not-in-the-united-states.html>

Corporate Taxes

Published: May 25, 2013

Across U.S. Companies, Tax Rates Vary Greatly

Last week, in a Congressional hearing, Apple got grilled for its low-tax strategy. But not every business can copy that approach. Here is a look at what S&P 500 companies paid in corporate income taxes — federal, state, local and foreign — from 2007 to 2012, according to S&P Capital IQ. [Related Article »](#)



1. What variables form the frame?
2. What glyphs (marks/geoms) are used?
3. What are the aesthetics (properties) for those glyphs?
4. Which variables are mapped to each aesthetic?
5. Which variables, if any, are used for faceting (small multiples)?
6. Which scales have a corresponding guide?
7. What would a row of the data used to create this plot look like? (Include variable names and (estimated) values.)
8. What are the biggest strengths/weakness of this plot?
9. Are there any elements of this plot that don't fit into the "grammar of graphics"?

Source: <https://archive.nytimes.com/www.nytimes.com/interactive/2013/05/25/sunday-review/corporate-taxes.html>

Political Bar Charts

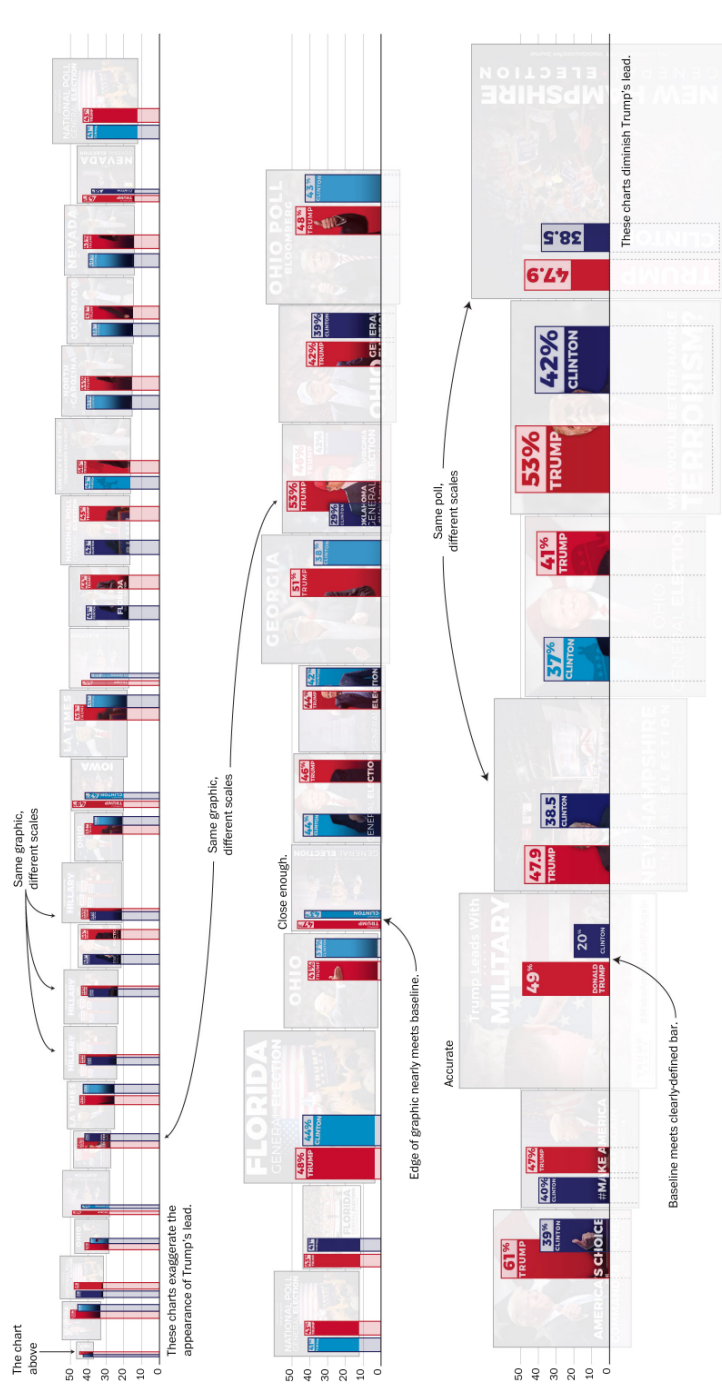


1. What variables form the frame?
2. What glyphs (marks/geoms) are used?
3. What are the aesthetics (properties) for those glyphs?
4. Which variables are mapped to each aesthetic?
5. Which variables, if any, are used for faceting (small multiples)?
6. Which scales have a corresponding guide?
7. What would a row of the data used to create this plot look like? (Include variable names and (estimated) values.)
8. What are the biggest strengths/weakness of this plot?
9. Are there any elements of this plot that don't fit into the "grammar of graphics"?

Source: <https://www.washingtonpost.com/graphics/politics/2016-election/trump-charts/>

- This is from an article by a Calvin alumnus, John Muyskens

Political Bar Charts, part 2

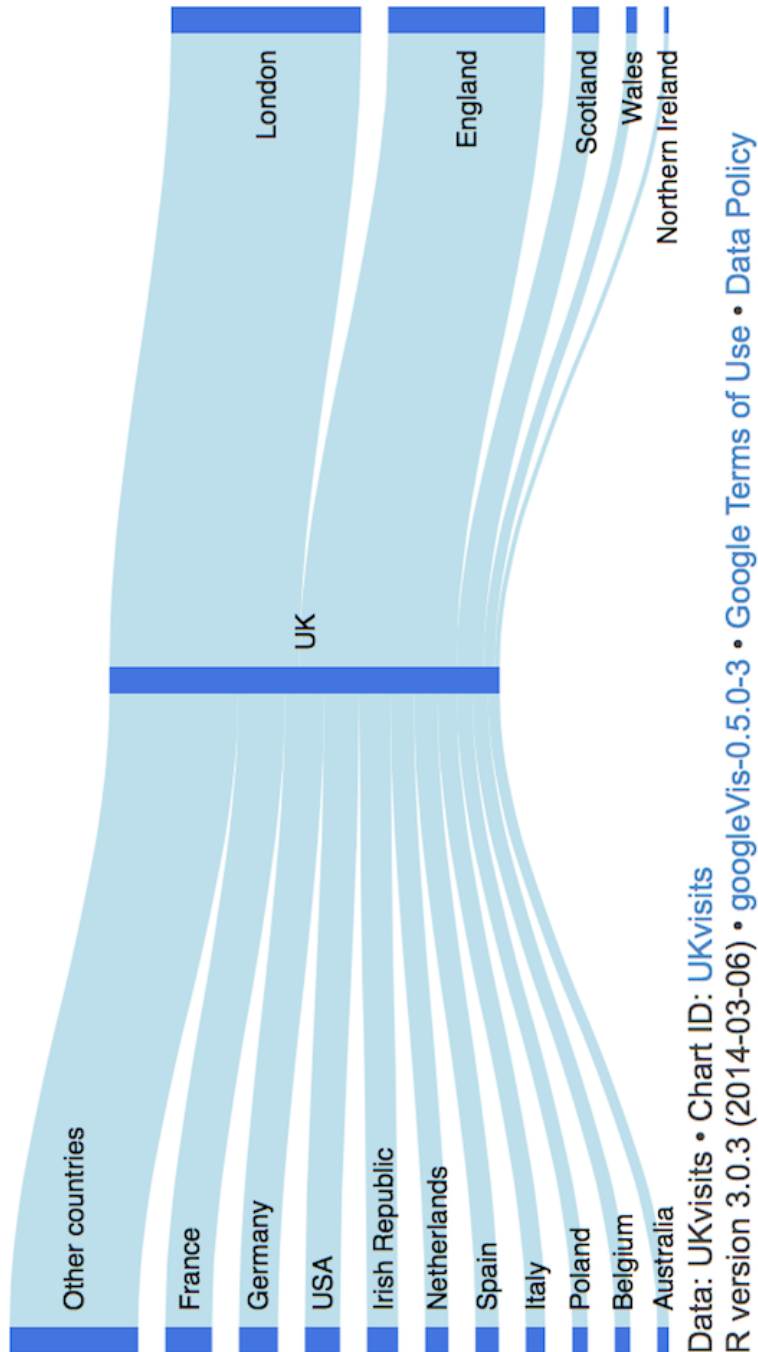


1. What variables form the frame?
2. What glyphs (marks/geoms) are used?
3. What are the aesthetics (properties) for those glyphs?
4. Which variables are mapped to each aesthetic?
5. Which variables, if any, are used for faceting (small multiples)?
6. Which scales have a corresponding guide?
7. What would a row of the data used to create this plot look like? (Include variable names and (estimated) values.)
8. What are the biggest strengths/weakness of this plot?
9. Are there any elements of this plot that don't fit into the "grammar of graphics"?

Source: <https://www.washingtonpost.com/graphics/politics/2016-election/trump-charts/>

- This is from an article by a Calvin alumnus, John Muyskens

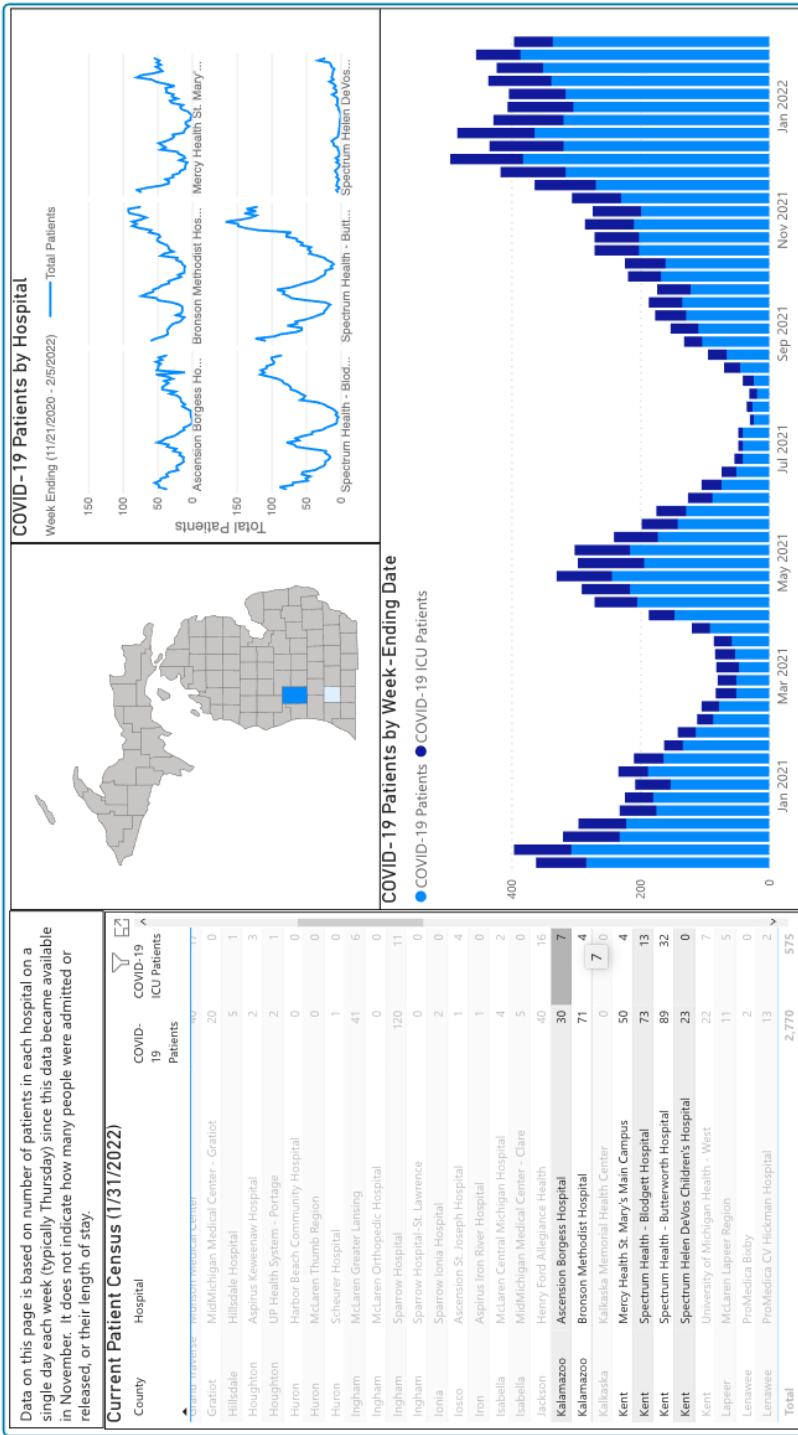
UK visits



1. What variables form the frame?
2. What glyphs (marks/geoms) are used?
3. What are the aesthetics (properties) for those glyphs?
4. Which variables are mapped to each aesthetic?
5. Which variables, if any, are used for faceting (small multiples)?
6. Which scales have a corresponding guide?
7. What would a row of the data used to create this plot look like? (Include variable names and (estimated) values.)
8. What are the biggest strengths/weakness of this plot?
9. Are there any elements of this plot that don't fit into the "grammar of graphics"?

Source: <https://www.magesblog.com/post/2014-03-25-sankey-diagrams-with-googlevis/>

Kent County COVID dashboard



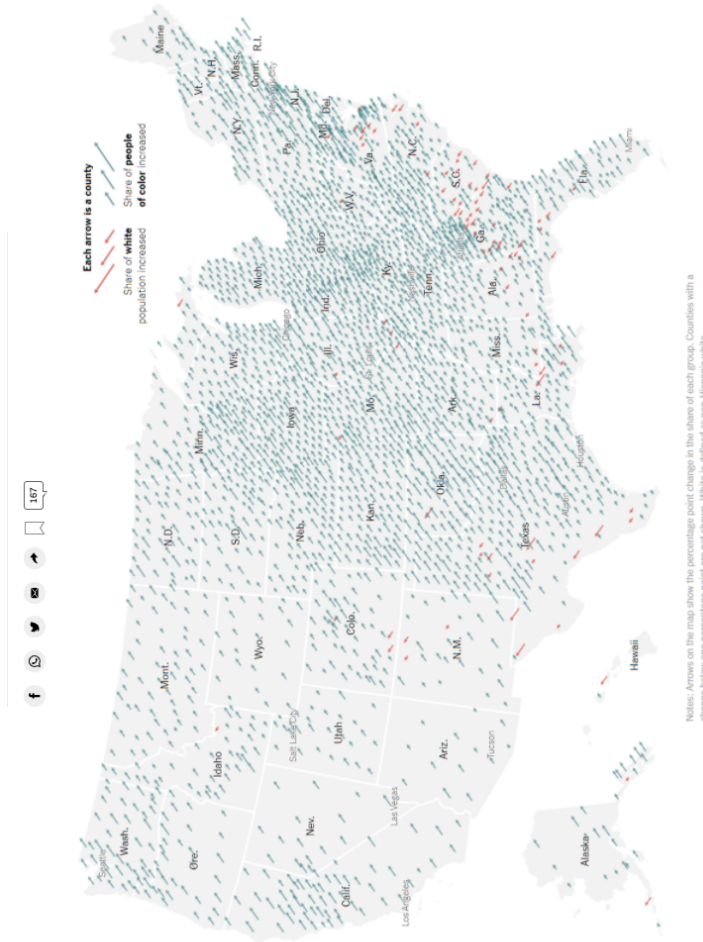
1. What variables form the frame?
2. What glyphs (marks/geoms) are used?
3. What are the aesthetics (properties) for those glyphs?
4. Which variables are mapped to each aesthetic?
5. Which variables, if any, are used for faceting (small multiples)?
6. Which scales have a corresponding guide?
7. What would a row of the data used to create this plot look like? (Include variable names and (estimated) values.)
8. What are the biggest strengths/weakness of this plot?
9. Are there any elements of this plot that don't fit into the "grammar of graphics"?

Source: <https://www.accesskent.com/Health/covid-19-data.htm>

Population Diversity Shift

Population Diversity Shift

How has the diversity of the population of the United States shifted from 2010 to 2020?



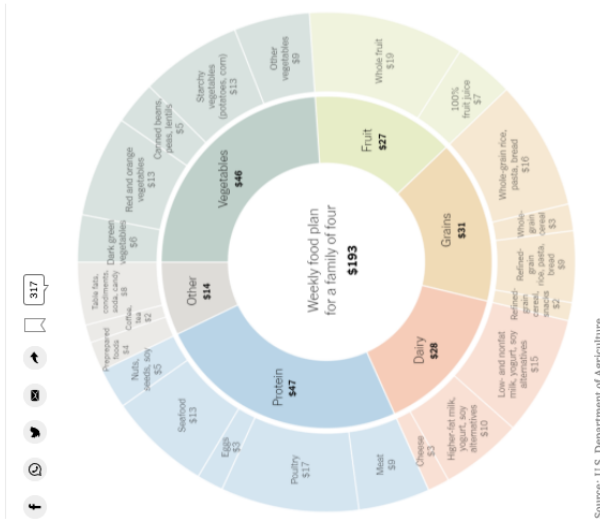
1. What variables form the frame?
2. What glyphs (marks/geoms) are used?
3. What are the aesthetics (properties) for those glyphs?
4. Which variables are mapped to each aesthetic?
5. Which variables, if any, are used for faceting (small multiples)?
6. Which scales have a corresponding guide?
7. What would a row of the data used to create this plot look like? (Include variable names and (estimated) values.)
8. What are the biggest strengths/weakness of this plot?
9. Are there any elements of this plot that don't fit into the "grammar of graphics"?

Source: <https://www.nytimes.com/2022/01/13/learning/whats-going-on-in-this-graph-jan-19-2022.html>

Snap Thrifty Food Plan

SNAP 'Thrifty Food Plan'

The Agriculture Department has revised its model dietary plan illustrating how families could practically meet nutritional guidelines at a low cost. What do you notice and wonder?



Source: U.S. Department of Agriculture

By The Learning Network
Published Oct. 7, 2021 Updated Oct. 14, 2021

1. What variables form the frame?
2. What glyphs (marks/geoms) are used?
3. What are the aesthetics (properties) for those glyphs?
4. Which variables are mapped to each aesthetic?
5. Which variables, if any, are used for faceting (small multiples)?
6. Which scales have a corresponding guide?
7. What would a row of the data used to create this plot look like? (Include variable names and (estimated) values.)
8. What are the biggest strengths/weakness of this plot?
9. Are there any elements of this plot that don't fit into the "grammar of graphics"?

Source: <https://www.nytimes.com/2021/10/07/learning/whats-going-on-in-this-graph-oct-13-2021.html>

Carbon Emissions

Global Carbon Emissions

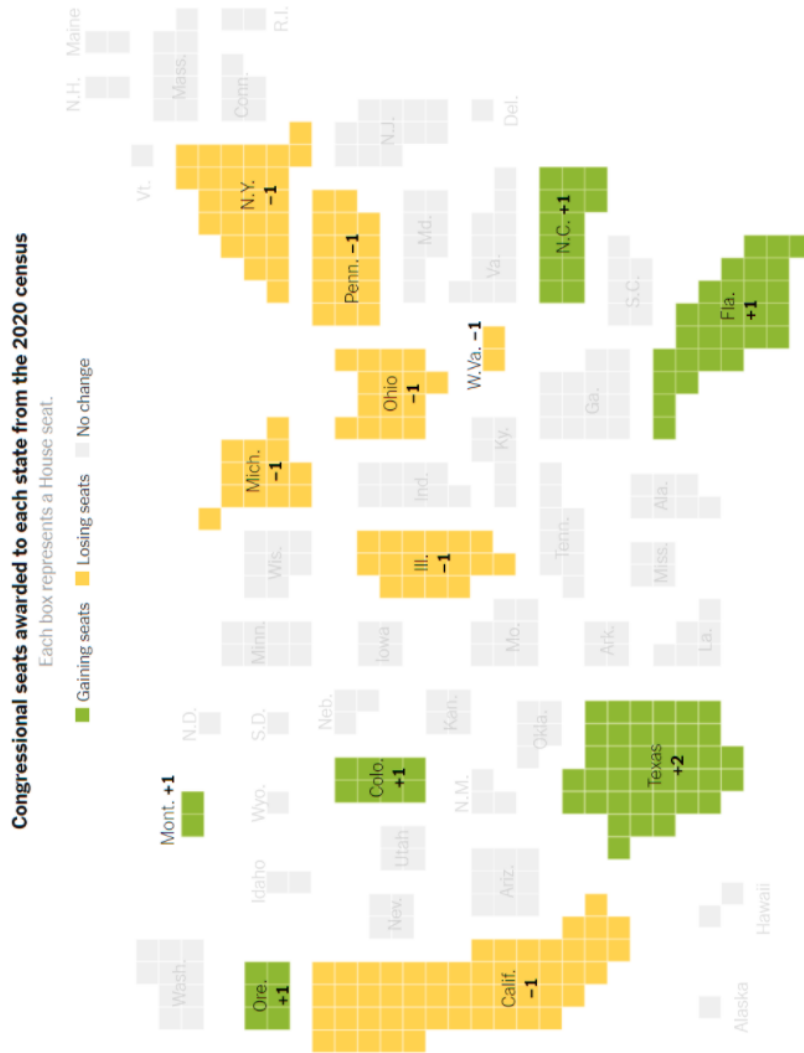
Compare the historical share of global carbon emissions — both total emissions and emissions per person — for the world's 23 richest countries to the share from all of the world's other countries.



1. What variables form the frame?
2. What glyphs (marks/geoms) are used?
3. What are the aesthetics (properties) for those glyphs?
4. Which variables are mapped to each aesthetic?
5. Which variables, if any, are used for faceting (small multiples)?
6. Which scales have a corresponding guide?
7. What would a row of the data used to create this plot look like? (Include variable names and (estimated) values.)
8. What are the biggest strengths/weakness of this plot?
9. Are there any elements of this plot that don't fit into the "grammar of graphics"?

Source: <https://www.nytimes.com/2021/11/18/learning/whats-going-on-in-this-graph-dec-1-2021.html>

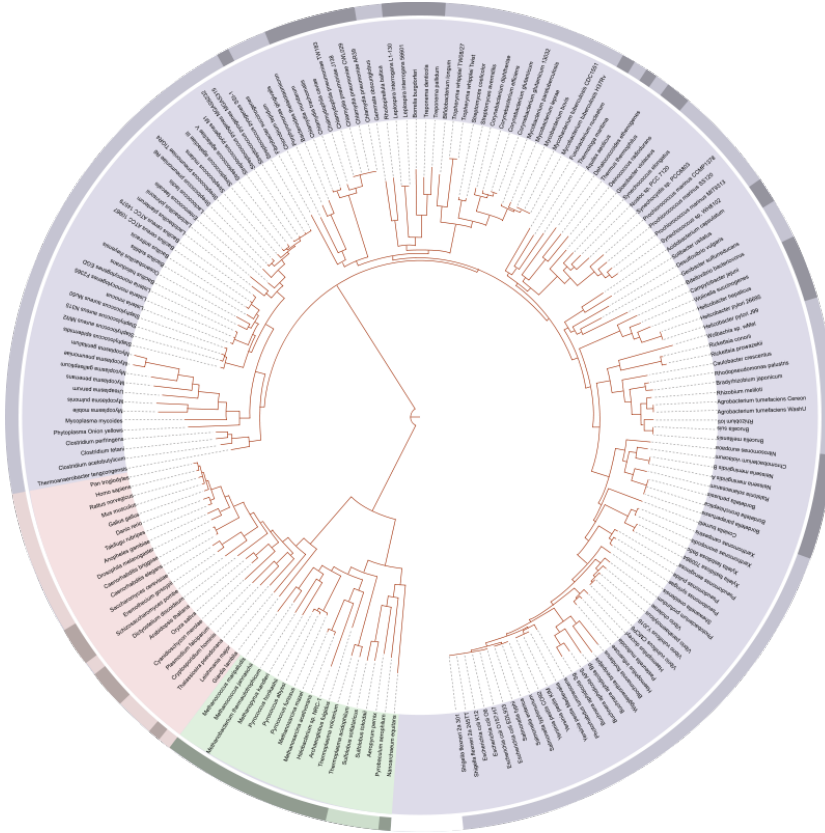
Congressional Seats



1. What variables form the frame?
2. What glyphs (marks/geoms) are used?
3. What are the aesthetics (properties) for those glyphs?
4. Which variables are mapped to each aesthetic?
5. Which variables, if any, are used for faceting (small multiples)?
6. Which scales have a corresponding guide?
7. What would a row of the data used to create this plot look like? (Include variable names and (estimated) values.)
8. What are the biggest strengths/weakness of this plot?
9. Are there any elements of this plot that don't fit into the "grammar of graphics"?

Source: <https://www.nytimes.com/2021/10/21/learning/whats-going-on-in-this-graph-oct-27-2021.html>

Tree of Life



1. What variables form the frame?
2. What glyphs (marks/geoms) are used?
3. What are the aesthetics (properties) for those glyphs?
4. Which variables are mapped to each aesthetic?
5. Which variables, if any, are used for faceting (small multiples)?
6. Which scales have a corresponding guide?
7. What would a row of the data used to create this plot look like? (Include variable names and (estimated) values.)
8. What are the biggest strengths/weakness of this plot?
9. Are there any elements of this plot that don't fit into the "grammar of graphics"?

Source:

- https://en.wikipedia.org/wiki/Phylogenetic_tree
- [https://en.wikipedia.org/wiki/Tree_of_life_\(biology\)](https://en.wikipedia.org/wiki/Tree_of_life_(biology))